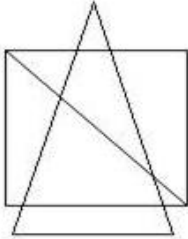


Combined Graduate Level Examination-2019 (Tier-I)

Roll Number	
Candidate Name	
Venue Name	iON Digital Zone iDZ Jamshedpur
Exam Date	03/03/2020
Exam Time	1:00 PM - 2:00 PM
Subject	CGLE Tier I

Section : General Intelligence and Reasoning

Q.1 How many triangles are there in the given figure?



- Ans
- 1. 8
 - 2. 12
 - 3. 6
 - 4. 10

Question ID : 123568121
Status : Answered
Chosen Option : 4

Q.2 In an exam of 80 questions, a correct answer is given +1 mark, a wrong answer is given -1 mark, and if a question is not attempted there are zero marks. If a student attempted only 80% of the questions and got 32 marks, then how many questions did he answer correctly?

- Ans
- 1. 32
 - 2. 48
 - 3. 56
 - 4. 16

Question ID : 123568119
Status : Answered
Chosen Option : 2

Q.3 Select the option figure in which the given figure is embedded (rotation is not allowed).

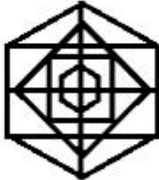


Ans

1.



2.



3.



4.



Question ID : 123568123
Status : Answered
Chosen Option : 4

Q.4 Select the letter that can replace the question mark (?) in the following series.

J, M, P, ?, V, Y

Ans 1. R

2. O

3. S

4. T

Question ID : 123568102
Status : Answered
Chosen Option : 3

Q.5 Select the letter-cluster that can replace the question mark (?) in the following series.

BRH, ZUD, ?, VAV, TDR, RGN

Ans 1. XYZ

2. XZY

3. XZZ

4. XXZ

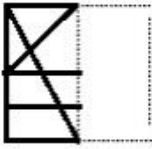
Question ID : 123568110
Status : Answered
Chosen Option : 4

Q.6 Select the option that depicts how the given transparent sheet of paper would appear if it is folded at the dotted line.

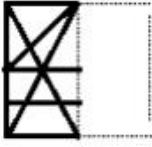


Ans

1.



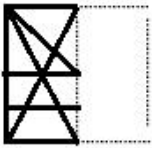
2.



3.



4.



Question ID : 123568125
Status : Answered
Chosen Option : 4

Q.7 Four number-pairs have been given, out of which three are alike in some manner and one is different. Select the number-pair that is different from the rest.

- Ans 1. 42 -12
 2. 57-38
 3. 28-60
 4. 39 -72

Question ID : 123568115
Status : Answered
Chosen Option : 1

Q.8 Select the option that is related to the third number in the same way as the second number is related to the first number.

2809 : 53 :: 1524 : ?

- Ans 1. 31
 2. 32
 3. 33
 4. 35

Question ID : 123568114
Status : Not Attempted and Marked For Review
Chosen Option : --

Q.9 'Cardiologist' is related to 'Heart' in the same way as 'Neurologist' is related to '_____'.

- Ans
- 1. Lungs
 - 2. Ears
 - 3. Brain
 - 4. Teeth

Question ID : 123568106
Status : Answered
Chosen Option : 3

Q.10 In a certain code language, 'HAMMER' is written as 'ICPQJX'. How will 'WRENCH' be written as in that language?

- Ans
- 1. XTHRIN
 - 2. XTHRHN
 - 3. XTIRHN
 - 4. XTIRIN

Question ID : 123568108
Status : Answered
Chosen Option : 2

Q.11 Three different positions of the same dice are shown. Select the symbol that will be on the face opposite to the one showing '<'.



- Ans
- 1. @
 - 2. \$
 - 3. &
 - 4. #

Question ID : 123568122
Status : Answered
Chosen Option : 1

Q.12 Which two signs should be interchanged to make the given equation correct?

$$36 \div 2 \times 12 + 3 - 6 = 24$$

- Ans
- 1. \div and \times
 - 2. $-$ and \div
 - 3. \times and $-$
 - 4. $+$ and \times

Question ID : 123568118
Status : Answered
Chosen Option : 3

Q.13 Study the given pattern carefully and select the number that can replace the question mark (?) in it.

7 13 6
4 22 18
15 ? 7

- Ans**
- 1. 22
 - 2. 24
 - 3. 23
 - 4. 21

Question ID : 123568116
Status : Answered
Chosen Option : 1

Q.14 Read the given statements and conclusions carefully. Assuming that the information given in the statements is true, even if it appears to be at variance with commonly known facts, decide which of the given conclusions logically follow(s) from the statements.

Statements:

- 1. All dogs are lions.
- 2. No elephant is a lion.

Conclusions:

- I. No dog is an elephant.
- II. No lion is a dog.
- III. Some elephants are dogs.

- Ans**
- 1. Only conclusion II follows.
 - 2. Only conclusions II and III follow.
 - 3. Only conclusion I follows.
 - 4. Only conclusions I and III follow.

Question ID : 123568112
Status : Answered
Chosen Option : 3

Q.15 Select the option in which the words share the same relationship as that shared by the given pair of words.

Faculty : Teachers

- Ans**
- 1. Fleet : Trucks
 - 2. Colony : Wolves
 - 3. Galaxy : Apartments
 - 4. Ants : Flock

Question ID : 123568107
Status : Marked For Review
Chosen Option : 1

Q.16 Four letter-clusters have been given, out of which three are alike in some manner and one is different. Select the odd letter-cluster.

- Ans**
- 1. FHKM
 - 2. BEHK
 - 3. JMPS
 - 4. ADGJ

Question ID : 123568104
Status : Answered
Chosen Option : 1

Q.17 Study the given pattern carefully and select the number that can replace the question mark (?) in it.

5 4 41
15 6 ?
9 11 202

- Ans**
- 1. 122
 - 2. 212
 - 3. 209
 - 4. 261

Question ID : 123568117
Status : Answered
Chosen Option : 4

Q.18 Eight words have been given, out of which seven are alike in some manner and one is different. Select the odd word.

Monitor, Headphone, Mouse, Keyboard, Windows, Printer, Scanner, Speaker

- Ans**
- 1. Mouse
 - 2. Monitor
 - 3. Windows
 - 4. Printer

Question ID : 123568105
Status : Answered
Chosen Option : 3

Q.19 $A + B$ means 'B is the brother of A';

$A - B$ means 'A is the mother of B';

$A \times B$ means 'A is the father of B';

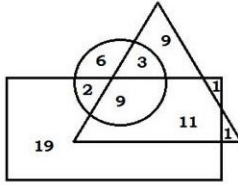
$A \div B$ means 'A is the son of B'.

If, $P + R \times T - Q \div S + U$, then how is S related to R?

- Ans**
- 1. Brother
 - 2. Grandfather
 - 3. Grandson
 - 4. Son-in-law

Question ID : 123568111
Status : Answered
Chosen Option : 4

Q.20 In the given Venn diagram, the 'circle' represents 'ladies', the 'triangle' represents 'teachers', and the 'rectangle' represents 'unmarried persons'. The numbers given in the diagram represent the number of persons in that particular category.



How many married ladies are teachers?

- Ans**
- 1. 11
 - 2. 6
 - 3. 9
 - 4. 3

Question ID : 123568126

Status : Answered

Chosen Option : 4

Q.21 Select the number that can replace the question mark (?) in the following series.

55, 58, 64, ?, 85

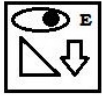
- Ans**
- 1. 70
 - 2. 73
 - 3. 67
 - 4. 77

Question ID : 123568113

Status : Answered

Chosen Option : 2

Q.22 Select the correct mirror image of the given figure when a mirror is placed on the right of the figure.



Ans

✗ 1.



✓ 2.



✗ 3.



✗ 4.



Question ID : 123568124

Status : Answered

Chosen Option : 2

Q.23 In a certain code language, 'PEN' is coded as '321028'. How will 'TUB' be coded as in that language?

Ans

✓ 1. 40424

✗ 2. 44024

✗ 3. 40422

✗ 4. 42404

Question ID : 123568109

Status : Answered

Chosen Option : 1

Q.24 Select the figure that can replace the question mark (?) in the following series.



Ans



Question ID : 123568120

Status : Answered

Chosen Option : 1

Q.25 Arrange the following words in a logical and meaningful order.

1. Hexagon
2. Nonagon
3. Pentagon
4. Heptagon
5. Octagon

Ans ✓ 1. 3-1-4-5-2

✗ 2. 1-3-4-5-2

✗ 3. 4-3-1-2-5

✗ 4. 1-4-5-2-3

Question ID : 123568103

Status : Answered

Chosen Option : 1

Q.1 In which district of Karnataka is the Brahmagiri Wildlife Sanctuary located?

- Ans
- 1. Mandya
 - 2. Udupi
 - 3. Hassan
 - 4. Kodagu

Question ID : 123568138

Status : **Not Attempted and Marked For Review**

Chosen Option : --

Q.2 Which of the following festivals means 'Merry making of the Gods'?

- Ans
- 1. Diwali
 - 2. Lai Haraoba
 - 3. Pongal
 - 4. Makar Sankranti

Question ID : 123568128

Status : **Marked For Review**

Chosen Option : 2

Q.3 In which year was the foundation stone for the Gateway of India laid in Bombay (now Mumbai)?

- Ans
- 1. 1920
 - 2. 1915
 - 3. 1913
 - 4. 1905

Question ID : 123568141

Status : **Marked For Review**

Chosen Option : 3

Q.4 What was India's position in the Brand Finance Nation ranking of 2019?

- Ans
- 1. Third
 - 2. Fifth
 - 3. Seventh
 - 4. Sixth

Question ID : 123568130

Status : **Not Attempted and Marked For Review**

Chosen Option : --

Q.5 Which of the following is the major component of vinegar?

- Ans
- 1. Lactic acid
 - 2. Citric acid
 - 3. Nitric acid
 - 4. Acetic acid

Question ID : 123568131

Status : **Answered**

Chosen Option : 4

Q.6 Which of the following is NOT a vertebrate?

- Ans
- 1. Fish
 - 2. Mammal
 - 3. Bird
 - 4. Snail

Question ID : 123568133
Status : Answered
Chosen Option : 4

Q.7 Who among the following was the last ruler of the Nanda dynasty?

- Ans
- 1. Kaivarta
 - 2. Govishanaka
 - 3. Panduka
 - 4. Dhanananda

Question ID : 123568140
Status : Marked For Review
Chosen Option : 4

Q.8 In which of the following states is the Madhavpur Mela celebrated?

- Ans
- 1. Gujarat
 - 2. Bihar
 - 3. Uttar Pradesh
 - 4. Madhya Pradesh

Question ID : 123568127
Status : Not Attempted and Marked For Review
Chosen Option : --

Q.9 Objects that shine in the night sky are known as:

- Ans
- 1. constellations
 - 2. celestial bodies
 - 3. meteoroids
 - 4. asteroids

Question ID : 123568136
Status : Marked For Review
Chosen Option : 2

Q.10 Who among the following was honoured with the 50th Dadasaheb Phalke Award?

- Ans
- 1. Anupam Kher
 - 2. Kamal Haasan
 - 3. Naseeruddin Shah
 - 4. Amitabh Bachchan

Question ID : 123568143
Status : Answered
Chosen Option : 4

Q.11 Which of the following glands is present between the lungs?

- Ans
- 1. Pituitary
 - 2. Pineal
 - 3. Hypothalamus
 - 4. Thymus

Question ID : 123568132
Status : Answered
Chosen Option : 4

Q.12 In January 2020, Home Minister Amit Shah released a book 'Karmayoddha Granth'. This book is based on the life of _____.

- Ans
- 1. Narendra Modi
 - 2. Jawaharlal Nehru
 - 3. Sardar Vallabhbhai Patel
 - 4. Mahatma Gandhi

Question ID : 123568151
Status : Answered
Chosen Option : 1

Q.13 Archaeologist R Nagaswamy was honoured at the Silver Jubilee International Conference of Art by which country?

- Ans
- 1. Nepal
 - 2. Bhutan
 - 3. China
 - 4. Bangladesh

Question ID : 123568144
Status : Not Attempted and Marked For Review
Chosen Option : --

Q.14 In which of the following countries was the 95th edition of the prestigious Hastings International Chess Congress held?

- Ans
- 1. France
 - 2. England
 - 3. Australia
 - 4. Belgium

Question ID : 123568148
Status : Not Attempted and Marked For Review
Chosen Option : --

Q.15 When we cut an onion, the synthase enzyme converts the amino acid sulfoxides of the onion into which acid?

- Ans
- 1. Sulphuric acid
 - 2. Sulfenic acid
 - 3. Citric acid
 - 4. Nitric acid

Question ID : 123568135
Status : Answered
Chosen Option : 2

Q.16 Which state's Legislative Assembly adopted a new logo consisting of the national emblem and foxtail orchid (*Rhynchosyilis Retusa*), the state flower, in January 2020?

- Ans
- 1. Arunachal Pradesh
 - 2. Meghalaya
 - 3. Mizoram
 - 4. Tripura

Question ID : 123568146
Status : Not Attempted and Marked For Review
Chosen Option : --

Q.17 Wings India 2020 is scheduled to be held in which of the following airports?

- Ans
- 1. Vijayawada Airport
 - 2. Rajahmundry Airport
 - 3. Warangal Airport
 - 4. Begumpet Airport

Question ID : 123568150
Status : Marked For Review
Chosen Option : 4

Q.18 In which state was the Global Investors Meet, ASCEND 2020 organised?

- Ans
- 1. Gujarat
 - 2. Kerala
 - 3. Rajasthan
 - 4. Maharashtra

Question ID : 123568129
Status : Marked For Review
Chosen Option : 1

Q.19 Borra caves are situated on the East Coast of India in which of the following hills?

- Ans
- 1. Nagari Hills
 - 2. Horsley Hills
 - 3. Nallamala Hills
 - 4. Ananthagiri Hill

Question ID : 123568137
Status : Marked For Review
Chosen Option : 3

Q.20 Which of the following was previously known as 'the Lady Willingdon Park'?

- Ans
- 1. Mughal Gardens
 - 2. Deer Park
 - 3. Buddha Jayanti Park
 - 4. Lodhi Gardens

Question ID : 123568142

Status : **Not Attempted and Marked For Review**

Chosen Option : --

Q.21 'Industry 4.0' is a complex cyber-physical system which synergies production with digital technologies. The Ministry of Railways and the Department of Science and Technology have joined hands in partnership with which institution for taking up a unique project on 'Industry 4.0'?

- Ans
- 1. IIT Madras
 - 2. IIT Bombay
 - 3. IIT Delhi
 - 4. IIT Kanpur

Question ID : 123568145

Status : **Marked For Review**

Chosen Option : 1

Q.22 Who became the first Indian equestrian to qualify for the Tokyo Olympics 2020?

- Ans
- 1. Amar Sarin
 - 2. Fouaad Mirza
 - 3. Amit Sinsinwar
 - 4. Sehej Singh Virk

Question ID : 123568147

Status : **Not Attempted and Marked For Review**

Chosen Option : --

Q.23 Which law of physics states that the force between the two electric charges reduces to a quarter of its former value when the distance between them is doubled?

- Ans
- 1. Stefan's Law
 - 2. Pascal's Law
 - 3. Coulomb's Law
 - 4. Hooke's Law

Question ID : 123568134

Status : **Answered**

Chosen Option : 3

Q.24 In which state has the Khadi and Village Industries Commission (KVIC) opened the first silk processing plant?

- Ans
- 1. Tamil Nadu
 - 2. Karnataka
 - 3. Maharashtra
 - 4. Gujarat

Question ID : 123568149
Status : Answered
Chosen Option : 3

Q.25 Ajatashatru, a ruler of the Haryanka Dynasty, was the son of ____.

- Ans
- 1. Bimbisara
 - 2. Anurudha
 - 3. Naga-Dasak
 - 4. Udayin

Question ID : 123568139
Status : Not Attempted and Marked For Review
Chosen Option : --

Section : Quantitative Aptitude

Q.1

- Ans
- 1.
 - 2.
 - 3.
 - 4.

Question ID : 123568176
Status : Answered
Chosen Option : 1

Q.2

- Ans
- 1.
 - 2.
 - 3.
 - 4.

Question ID : 123568152
Status : Answered
Chosen Option : 1

Q.3

- Ans
- 1.
 - 2.
 - 3.
 - 4.

Question ID : 123568163
Status : Not Attempted and Marked For Review
Chosen Option : --

Q.4

- Ans
- 1.
 - 2.
 - 3.
 - 4.

Question ID : 123568162
Status : Answered
Chosen Option : 4

Q.5

- Ans
- 1.
 - 2.
 - 3.
 - 4.

Question ID : 123568169
Status : Answered
Chosen Option : 2

Q.6

- Ans
- 1.
 - 2.
 - 3.
 - 4.

Question ID : 123568157
Status : Answered
Chosen Option : 3

Q.7

- Ans
- 1.
 - 2.
 - 3.
 - 4.

Question ID : 123568174
Status : Answered
Chosen Option : 4

Q.8

- Ans
- 1.
 - 2.
 - 3.
 - 4.

Question ID : 123568165
Status : Not Attempted and
Marked For Review
Chosen Option : --

Q.9

- Ans
- 1.
 - 2.
 - 3.
 - 4.

Question ID : 123568161

Status : **Not Attempted and Marked For Review**

Chosen Option : --

Q.10

- Ans
- 1.
 - 2.
 - 3.
 - 4.

Question ID : 123568154

Status : **Answered**

Chosen Option : 1

Q.11

- Ans
- 1.
 - 2.
 - 3.
 - 4.

Question ID : 123568160

Status : **Answered**

Chosen Option : 2

Q.12

- Ans
- 1.
 - 2.
 - 3.
 - 4.

Question ID : 123568175

Status : **Answered**

Chosen Option : 2

Q.13

- Ans
- 1.
 - 2.
 - 3.
 - 4.

Question ID : 123568164

Status : **Answered**

Chosen Option : 4

Q.14

- Ans 1.
 2.
 3.
 4.

Question ID : 123568153
Status : **Answered**
Chosen Option : 1

Q.15

- Ans 1.
 2.
 3.
 4.

Question ID : 123568168
Status : **Not Attempted and
Marked For Review**
Chosen Option : --

Q.16

- Ans 1.
 2.
 3.
 4.

Question ID : 123568171
Status : **Not Attempted and
Marked For Review**
Chosen Option : --

Q.17

- Ans 1.
 2.
 3.
 4.

Question ID : 123568156
Status : **Answered**
Chosen Option : 1

Q.18

- Ans 1.
 2.
 3.
 4.

Question ID : 123568158
Status : **Not Answered**
Chosen Option : --

Q.19

- Ans
- 1.
 - 2.
 - 3.
 - 4.

Question ID : 123568170
Status : **Not Answered**
Chosen Option : --

Q.20

- Ans
- 1.
 - 2.
 - 3.
 - 4.

Question ID : 123568159
Status : **Not Answered**
Chosen Option : --

Q.21

- Ans
- 1.
 - 2.
 - 3.
 - 4.

Question ID : 123568172
Status : **Not Answered**
Chosen Option : --

Q.22

- Ans
- 1.
 - 2.
 - 3.
 - 4.

Question ID : 123568167
Status : **Not Answered**
Chosen Option : --

Q.23

- Ans
- 1.
 - 2.
 - 3.
 - 4.

Question ID : 123568173
Status : **Not Answered**
Chosen Option : --

Q.24

- Ans
- 1.
 - 2.
 - 3.
 - 4.

Question ID : 123568166
Status : Not Answered
Chosen Option : --

Q.25

- Ans
- 1.
 - 2.
 - 3.
 - 4.

Question ID : 123568155
Status : Not Answered
Chosen Option : --

Section : English Comprehension

Q.1 Select the most appropriate word to fill in the blank.

It is an _____ day to start your new business.

- Ans
- 1. auspicious
 - 2. audacious
 - 3. occasional
 - 4. ominous

Question ID : 123568202
Status : Answered
Chosen Option : 1

Q.2 Select the antonym of the given word.

HILARIOUS

- Ans
- 1. Happy
 - 2. Merry
 - 3. Blithe
 - 4. Sad

Question ID : 123568194
Status : Answered
Chosen Option : 3

Q.3 Select the synonym of the given word.

PATHETIC

- Ans 1. Pitiful
 2. Curious
 3. Insignificant
 4. Dull

Question ID : 123568191
Status : Answered
Chosen Option : 1

Q.4 Select the most appropriate word to substitute the underlined word of the given sentence. If no substitution is required, select 'No improvement'.

There is a great degrade in values in modern age.

- Ans 1. degradation of values
 2. No improvement
 3. demonstration from values
 4. deliberation for values

Question ID : 123568182
Status : Answered
Chosen Option : 1

Q.5 Select the correct indirect form of the given sentence.

He said to me, "What are you doing?"

- Ans 1. He said that what I was doing.
 2. He said what I had been doing.
 3. He asked me what I was doing.
 4. He asked me that what was I doing.

Question ID : 123568180
Status : Answered
Chosen Option : 3

Q.6 In the sentence identify the segment which contains the grammatical error.

The modern man is busy acquiring more and more wealth and designing ways to invest it in more sense pleasures.

- Ans 1. modern man is busy
 2. acquiring more and more wealth
 3. in more sense pleasures
 4. designing ways to invest it

Question ID : 123568178
Status : Answered
Chosen Option : 3

Comprehension:

In the following passage, some words have been deleted. Fill in the blanks with the help of the alternatives given. Select the most appropriate option for each blank.

Machines were made to be man's servants. Yet, man has grown so (1)_____ on them that they are in a fair way to become his (2)_____. Already men spend most of their lives looking after and waiting (3)_____ machines. Machines are very stern bosses. They must be fed with coal and (4)_____ petrol to drink and oil to wash with and must be kept at an (5)_____ temperature.

SubQuestion No : 7

Q.7 Select the most appropriate option for blank no. 1

- Ans 1. dependent
 2. inferior
 3. subordinate
 4. helpless

Question ID : 123568184
Status : Answered
Chosen Option : 1

Comprehension:

In the following passage, some words have been deleted. Fill in the blanks with the help of the alternatives given. Select the most appropriate option for each blank.

Machines were made to be man's servants. Yet, man has grown so (1)_____ on them that they are in a fair way to become his (2)_____. Already men spend most of their lives looking after and waiting (3)_____ machines. Machines are very stern bosses. They must be fed with coal and (4)_____ petrol to drink and oil to wash with and must be kept at an (5)_____ temperature.

SubQuestion No : 8

Q.8 Select the most appropriate option for blank no. 2

- Ans 1. victims
 2. masters
 3. slaves
 4. administrators

Question ID : 123568185
Status : Answered
Chosen Option : 2

Comprehension:

In the following passage, some words have been deleted. Fill in the blanks with the help of the alternatives given. Select the most appropriate option for each blank.

Machines were made to be man's servants. Yet, man has grown so (1)_____ on them that they are in a fair way to become his (2)_____. Already men spend most of their lives looking after and waiting (3)_____ machines. Machines are very stern bosses. They must be fed with coal and (4)_____ petrol to drink and oil to wash with and must be kept at an (5)_____ temperature.

SubQuestion No : 9

Q.9 Select the most appropriate option for blank no. 3

- Ans 1. into
 2. upon
 3. under
 4. from

Question ID : 123568186
Status : Answered
Chosen Option : 2

Comprehension:

In the following passage, some words have been deleted. Fill in the blanks with the help of the alternatives given. Select the most appropriate option for each blank.

Machines were made to be man's servants. Yet, man has grown so (1)_____ on them that they are in a fair way to become his (2)_____. Already men spend most of their lives looking after and waiting (3)_____ machines. Machines are very stern bosses. They must be fed with coal and (4)_____ petrol to drink and oil to wash with and must be kept at an (5)_____ temperature.

SubQuestion No : 10

Q.10 Select the most appropriate option for blank no. 4

- Ans
- 1. gave
 - 2. give
 - 3. given
 - 4. gives

Question ID : 123568187

Status : Answered

Chosen Option : 3

Comprehension:

In the following passage, some words have been deleted. Fill in the blanks with the help of the alternatives given. Select the most appropriate option for each blank.

Machines were made to be man's servants. Yet, man has grown so (1)_____ on them that they are in a fair way to become his (2)_____. Already men spend most of their lives looking after and waiting (3)_____ machines. Machines are very stern bosses. They must be fed with coal and (4)_____ petrol to drink and oil to wash with and must be kept at an (5)_____ temperature.

SubQuestion No : 11

Q.11 Select the most appropriate option for blank no. 5

- Ans
- 1. optimist
 - 2. outdated
 - 3. optimum
 - 4. optional

Question ID : 123568188

Status : Answered

Chosen Option : 3

Q.12 Select the most appropriate word to fill in the blank.

He _____ a heinous crime.

- Ans
- 1. made
 - 2. committed
 - 3. occurred
 - 4. happened

Question ID : 123568201

Status : Answered

Chosen Option : 2

Q.13 Select the most appropriate segment to substitute the underlined segment of the given sentence. If no substitution is required select 'No improvement'

A man in need pleaded for help.

- Ans
- 1. No improvement
 - 2. promised for help
 - 3. commanded to help
 - 4. requested for helping

Question ID : 123568181
Status : Answered
Chosen Option : 1

Q.14 Given below are four jumbled sentences. Out of the given options pick the one that gives their correct order.

- A. Can I borrow your camera?
- B. I will give it back to you next week.
- C. I am going to jungle safari tomorrow.
- D. My friend told me that jungle is beautiful in these days.

- Ans
- 1. ADBC
 - 2. CDAB
 - 3. CADB
 - 4. BACD

Question ID : 123568189
Status : Answered
Chosen Option : 2

Q.15 Select the wrongly spelt word.

- Ans
- 1. Mansion
 - 2. Ostentasion
 - 3. Extension
 - 4. Persuasion

Question ID : 123568200
Status : Answered
Chosen Option : 2

Q.16 Select the most appropriate meaning of the given idiom

On shank's mare

- Ans
- 1. On foot
 - 2. On a lion
 - 3. On a bicycle
 - 4. On an elephant

Question ID : 123568196
Status : Not Attempted and Marked For Review
Chosen Option : --

Q.17 Select the correct active form of the given sentence.

The thief was being arrested by the police.

- Ans
- 1. The police had arrested the thief.
 - 2. The police arrested the thief.
 - 3. The police has arrested the thief.
 - 4. The police was arresting the thief.

Question ID : 123568179
Status : Answered
Chosen Option : 4

Q.18 Given below are four jumbled sentences. Out of the given options pick the one that gives their correct order.

- A. Nevertheless, sound health, economic security and mental satisfaction are desired by all
- B. A change that is conducive to happiness may be termed as progress.
- C. But different people find happiness in different things.
- D. So, if a change contributes to the growth of these factors, it is progress.

- Ans
- 1. BDCA
 - 2. BCAD
 - 3. DBCA
 - 4. ABCD

Question ID : 123568190
Status : Answered
Chosen Option : 1

Q.19 Select the synonym of the given word.

PENITENCE

- Ans
- 1. Patience
 - 2. Admiration
 - 3. Repentance
 - 4. Misery

Question ID : 123568192
Status : Not Attempted and Marked For Review
Chosen Option : --

Q.20 Select the wrongly spelt word.

- Ans
- 1. Practicle
 - 2. Flexible
 - 3. Elegant
 - 4. Flashy

Question ID : 123568199
Status : Answered
Chosen Option : 1

Q.21 Select one word for the following group of words.

One who leaves his own country to settle in another

- Ans
- 1. Foreigner
 - 2. Native
 - 3. Tourist
 - 4. Emigrant

Question ID : 123568198
Status : Answered
Chosen Option : 4

Q.22 Select one word for the following group of words.

A period of ten years

- Ans
- 1. Millennium
 - 2. Decade
 - 3. Century
 - 4. Fortnight

Question ID : 123568197
Status : Answered
Chosen Option : 2

Q.23 In the sentence identify the segment which contains the grammatical error.

The Prime Minister, along with the other ministers have left for America.

- Ans
- 1. for America
 - 2. The Prime Minister along with
 - 3. have left
 - 4. the other ministers

Question ID : 123568177
Status : Answered
Chosen Option : 3

Q.24 Select the most appropriate meaning of the given idiom

A snake in the grass

- Ans
- 1. A secret enemy
 - 2. A good friend
 - 3. A well-wisher
 - 4. Difficult to find

Question ID : 123568195
Status : Answered
Chosen Option : 1

Q.25 Select the antonym of the given word.

VICIOUS

- Ans 1. Unfortunate
 2. Virtuous
 3. Sinful
 4. Baneful

Question ID : 123568193

Status : Answered

Chosen Option : 2